

1.  $6 + 3 = \underline{\hspace{2cm}}$

2. 
$$\begin{array}{r} 8 \\ - 4 \\ \hline \end{array}$$

3. Make an
- X**
- on the fifth flower.



4. Fill in the missing sign.

$$4 \square 6 = 10$$

5. Nicole has 5 nickels in her pocket. She has 3 nickels in the bank. How much money does Nicole have?

\_\_\_\_\_ cents

1.  $6 + 4 = \underline{\hspace{2cm}}$

2. 
$$\begin{array}{r} 7 \\ - 3 \\ \hline \end{array}$$

3. What comes next?

32 \_\_\_\_\_ 57 \_\_\_\_\_

99 \_\_\_\_\_

4. Mark the half.



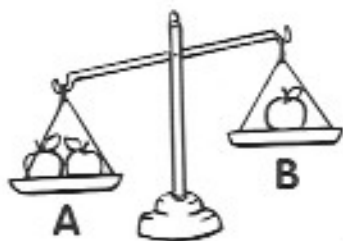
5. Kurt saw 11 fireflies in the backyard, and then 6 flew away. How many are still in the backyard?

\_\_\_\_\_ fireflies

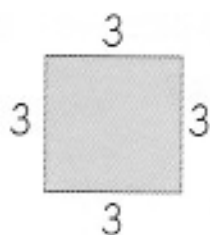
1.  $9 + 0 = \underline{\hspace{2cm}}$

4. Which side weighs more?

2. 
$$\begin{array}{r} 8 \\ - 7 \\ \hline \end{array}$$

3. How far is it around the box?

5. Kai took six jelly beans. If he ate half, how many did he eat?

                     jelly beans

1.  $6 - 6 = \underline{\hspace{2cm}}$

4. Count by tens.

2. 
$$\begin{array}{r} 7 \\ + 2 \\ \hline \end{array}$$

60                            


3. Write the number.

                     marbles

5. Mother gave Tanisha 1 dime and 10 pennies. How many 10¢ cookies can Tanisha buy?

                     cookies

Write four number sentences about the birds.



$$\underline{\quad} + \underline{\quad} = \underline{\quad}$$

$$\underline{\quad} + \underline{\quad} = \underline{\quad}$$

$$\underline{\quad} - \underline{\quad} = \underline{\quad}$$

$$\underline{\quad} - \underline{\quad} = \underline{\quad}$$

## Daily Progress Record

How many did you get correct each day? Color the squares.

5					
4					
3					
2					
1					
	Monday	Tuesday	Wednesday	Thursday	Friday

**Correct the sentences.**

1. will you help sammy with his homework

\_\_\_\_\_

2. his bike is blue with a orange seat

\_\_\_\_\_

**Tell the word that means more than one box.**

3. \_\_\_\_\_

**What two words are in "cupcake"?**

4. \_\_\_\_\_

**Put these letters in alphabetical order.**

5. t v x u z w y \_\_\_\_\_

**Correct the sentences.**

1. good for you

\_\_\_\_\_

2. will you mop that spill milk

\_\_\_\_\_

**Which word is spelled correctly?**

3. kup      cupe      cup

**Number the words in alphabetical order.**

4.  bed     car     ant

**Which words go together?**

5. ten      six      many      twenty

**Wednesday****Correct the sentences.**

1. them girls like to ride horses

\_\_\_\_\_

2. which toys is in the toy box

\_\_\_\_\_

**Which word has the sound of /a/ in "bake"?**

3. can      eight      wall      plant

**What does "pokey" mean in this sentence?**

4. The turtle was so pokey he came in last in the race.

a. fast

b. slow

c. cute

**Find the two words that rhyme.**

5. me      been      three      time

**Thursday****Correct the sentences.**

1. him and i are best friends

\_\_\_\_\_

2. what time will school been out

\_\_\_\_\_

**Find the word that is the opposite of "soft."**

3. fluffy      smooth      hard

**Which word has the sound of /th/ in "three"?**

4. then      thin      than

**Write a make-believe sentence about a frog.**

5. \_\_\_\_\_

**Find the missing words.**

- Waldo went to the soccer game with \_\_\_\_\_.  
them they those
- \_\_\_\_\_ have a funny bulldog for a pet.  
Them They Those
- I \_\_\_\_\_ tie my shoe.  
cant can't can't
- Angela \_\_\_\_\_ be able to come with us.  
wasn't wont won't
- Did you go to the \_\_\_\_\_ on your vacation?  
see sea seen

**Daily Progress Record**

How many did you get correct each day? Color the squares.

5					
4					
3					
2					
1					
	<b>Monday</b>	<b>Tuesday</b>	<b>Wednesday</b>	<b>Thursday</b>	<b>Friday</b>